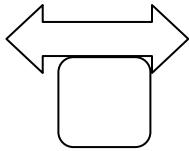


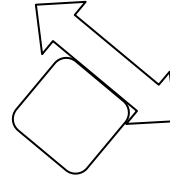
Quiz: Transformations

Label each figure with the correct term. **Translation** (slide) **Rotation** (turn) **Reflection** (flip).

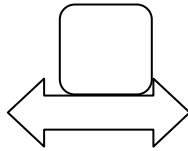
1.



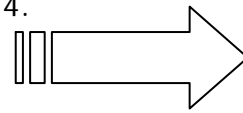
2.



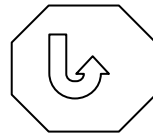

3.



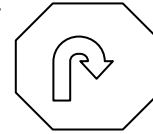
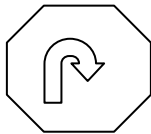
4.




5.



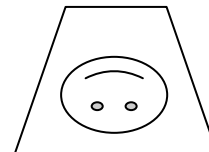
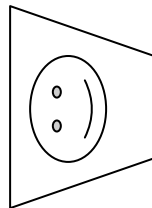
6.



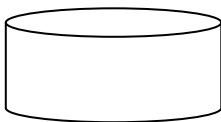
7.



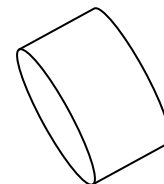
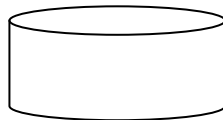
8.



9.



10.



Circle # Correct	0	1	2	3	4	5	6	7	8	9	10
Percentage Score	0%	10%	20%	30%	40%	50%	60%	70%	80%	90%	100%